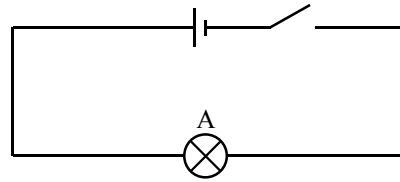
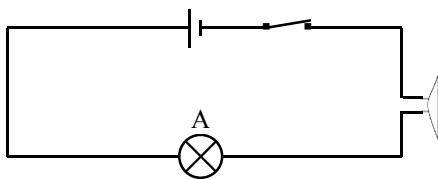
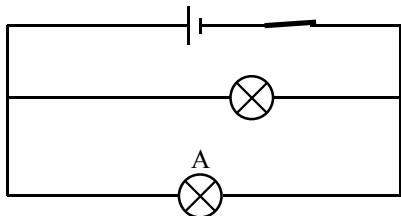
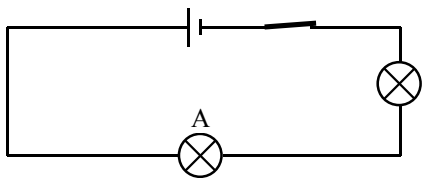
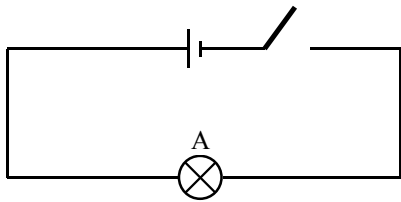


## ELECTRICITY 1

Here is a basic circuit that lights bulb A when the switch is down.



*What happens to bulb A in the following circuits :*

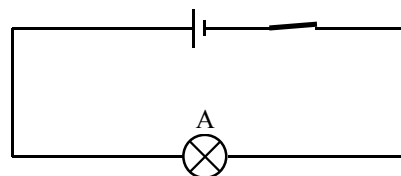


**GUESS**

**EXPERIMENT**

GUESS	EXPERIMENT

Here is a circuit but the bulb does not light.  
Give two reasons why this is possible:



\_\_\_\_\_

\_\_\_\_\_